

Good Morning. Happy Friday!



Our first lesson today is P.E. I want you to join in with the work out by Joe Wicks this morning. I will be doing the same. If you miss it, you can do this one...

<https://www.youtube.com/watch?v=Uylyab7jAcU>

Next up, we have maths.

We are going to be using known number facts to help us to add or subtract mentally.

To help us with this, I want you to warm up your brains by writing down as many pairs of numbers as you can, that equal 100, in 2 minutes. I managed 100. Can you beat me?

You will be able to use them to help with your task today.

Choose a chilli challenge for your questions today.

Example 1

$5 + 9 = 14$

$50 + 90 = 140$

$500 + 900 = 1400$

A

Copy and complete as in Example 1.

① $2 + 5 = 7$

$20 + \square = \square$

$200 + \square = \square$

② $6 + 3 = 9$

$\square + \square = 90$

$\square + \square = 900$

③ $8 - 3 = 5$

$80 - \square = \square$

$800 - \square = \square$

④ $9 - 7 = 2$

$\square - \square = 20$

$\square - \square = 200$

B

Copy and complete.

① $90 + \square = 130$

② $70 + \square = 150$

③ $80 + \square = 140$

④ $50 + \square = 120$

⑤ $300 + \square = 800$

⑥ $600 + \square = 900$

⑦ $200 + \square = 700$

⑧ $500 + \square = 900$

⑨ $130 - \square = 60$

⑩ $160 - \square = 70$

C

Copy and complete.

① $320 + \square = 500$

② $540 + \square = 910$

③ $430 + \square = 680$

④ $380 + \square = 700$

⑤ $410 - \square = 250$

⑥ $590 - \square = 370$

⑦ $870 - \square = 530$

⑧ $640 - \square = 460$

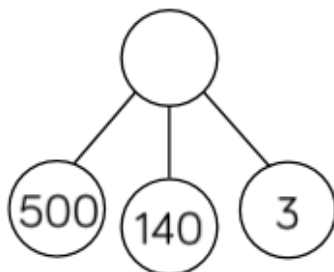
⑨ $100 - \square = 85$

⑩ $100 - \square = 25$

Which image is the odd one out?



539	540	541	542	543	544
-----	-----	-----	-----	-----	-----



Explain why.

How else can you represent the number?

Once you have answered the questions, can you work out the answer to this problem?

Our next lesson is English. You are going to be like a teacher and correctly use inverted commas for speech.

Hint!

Use the acronym SCAPS to help you remember how to punctuate speech correctly.

S = speech marks

C = capital letter

A = actual words spoken

P = punctuation

S = speech marks

1. Insert the missing inverted commas in the sentences below.

- a) It's time for bed, said Peter's mother Go and brush your teeth.
- b) While directing her daughter in the car, Mrs Jones said, Take the next left and then go straight ahead.
- c) Why are you being so annoying? Melanie moaned at her brother, Leave me alone!

2. Identify the mistakes in the punctuation and rewrite the sentence correctly below.

- a) How much flour do I need to make this cake"? asked Julie?

- b) "we need to bring a packed lunch and a change of clothes, don't we" asked James.

- c) "can't we stay up late tonight" asked Pete, it is the weekend after all!

Challenge!

A new speaker means you need to start a new line. Rewrite this passage correctly.

what's the time asked james is it time for lunch yet not quite yet replied mrs jones
I'm so hungry though complained james

Our final lesson is history.

Today I want you to research the parts of a castle.

Sketch a picture of a castle and then label these parts –

Gatehouse

Moat

Drawbridge

Arrow Loop

Turret

Follow this link for a tour of a real castle nearby.

<https://www.mi360.co.uk/virtual-tour-news/vr-tour-warwick-castle/>

Well done Class 3! Another fab week of learning! You are doing so well.

Remember to make time for a daily walk, read every day and keep practising your challenges. Don't forget you can email me too, even if it is just to say hello! Getting an email makes me smile!

Underneath is your maths and spelling homework for the weekend.

Have a great weekend.

Mrs Martin 😊

1. $300 + 80 + 8 = \underline{\hspace{2cm}}$

2. $7\frac{1}{2} \text{ kg} = \underline{\hspace{2cm}} \text{ g}$

3. $\frac{1}{2}$ of £90 = $\underline{\hspace{2cm}}$

4. 900 cm = $\underline{\hspace{2cm}}$ m

5. Circle the numbers that are multiples of 4 ?

20 16 14 26

6. Round 57 to the nearest 10 $\underline{\hspace{2cm}}$

7. Draw a line that is 6cm long. How many mm is that?

8. Divide 20 by 4 = $\underline{\hspace{2cm}}$

9. Find the change from £1 after buying

5 kg of apples at 12 p per kg. $\underline{\hspace{2cm}}$ p

10. Today is Friday 7th February. What is the date on Monday? $\underline{\hspace{2cm}}$

11. How many ml in 4 litres ? $\underline{\hspace{2cm}}$ ml

12. $10 \times \underline{\hspace{2cm}} = 190$

13. $21 + \underline{\hspace{2cm}} = 50$

14. Double 55 $\underline{\hspace{2cm}}$

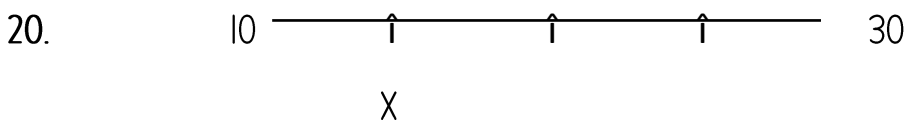
15. How many minutes in $\frac{3}{4}$ hour ? $\underline{\hspace{2cm}}$

16. Adding 10. $10 + 35 = \underline{\hspace{2cm}}$

17. One bag weighs 2 g. So, 6 bags weigh? $\underline{\hspace{2cm}}$ g.

18. A Tricycle has 3 wheels. How many wheels do 6 tricycles have? $\underline{\hspace{2cm}}$

19. What is my number? Take away 10 and the answer = 4. $\underline{\hspace{2cm}}$



Approximately, what is the value of point X ? $\underline{\hspace{2cm}}$

21. $5 \times 7 = \underline{\hspace{2cm}}$

22. $615 + 131 = \underline{\hspace{2cm}}$

23. Halve 64 _____

24. double 90 _____

25. How many sides does a triangle have? ____

26. Order these, smallest first: 111 121 141 124


27. Can you find the multiples of 5?

32 35 52 60

28. It is 3 pm. What will the time be in 15 mins?

29. Complete the pattern: 2, 6, 10,

30. What is my number? I take away 3 and the answer = 17 _____



Super Sentences

Here are 8 words from your spelling challenge. Practise the spelling of each one and then put them into a super sentence of your own.

1. heart
2. extreme
3. breath
4. bicycle
5. century
6. earth
7. eight
8. naughty